


Subject - Activity

Match the fruits




Subject - Activity

Colour the balloon




Subject - English

Colour the starting letter of the name of each picture




(C) (A) (J)



(B) (D) (F)



(F) (K) (O)



(A) (H) (G)



(R) (P) (I)

Subject - Hindi

रिक्त स्थान भरिए

अ	—	इ	—
—	ऊ	ऋ	—
ए	—	—	अं
—			

चित्र को रंग भरे और लिखो



ऋषि

ऋ
ऋ

ऋ
ऋ

ऋ
ऋ

ऋ
ऋ

Subject - English

Match capital letters with small letters :



Subject - Mathematics & English

1. What comes before :

_____ 5

_____ 7

_____ 12

_____ 16

_____ 20

_____ 23

_____ 27

_____ 29

_____ 32

_____ 35

2. Count and write how many :

2. Count and write how many :

a - _____

b - _____

c - _____

d - _____

e - _____

f - _____

a b c a d
e f a
a a f
c b d a
a e a

Subject - Activity



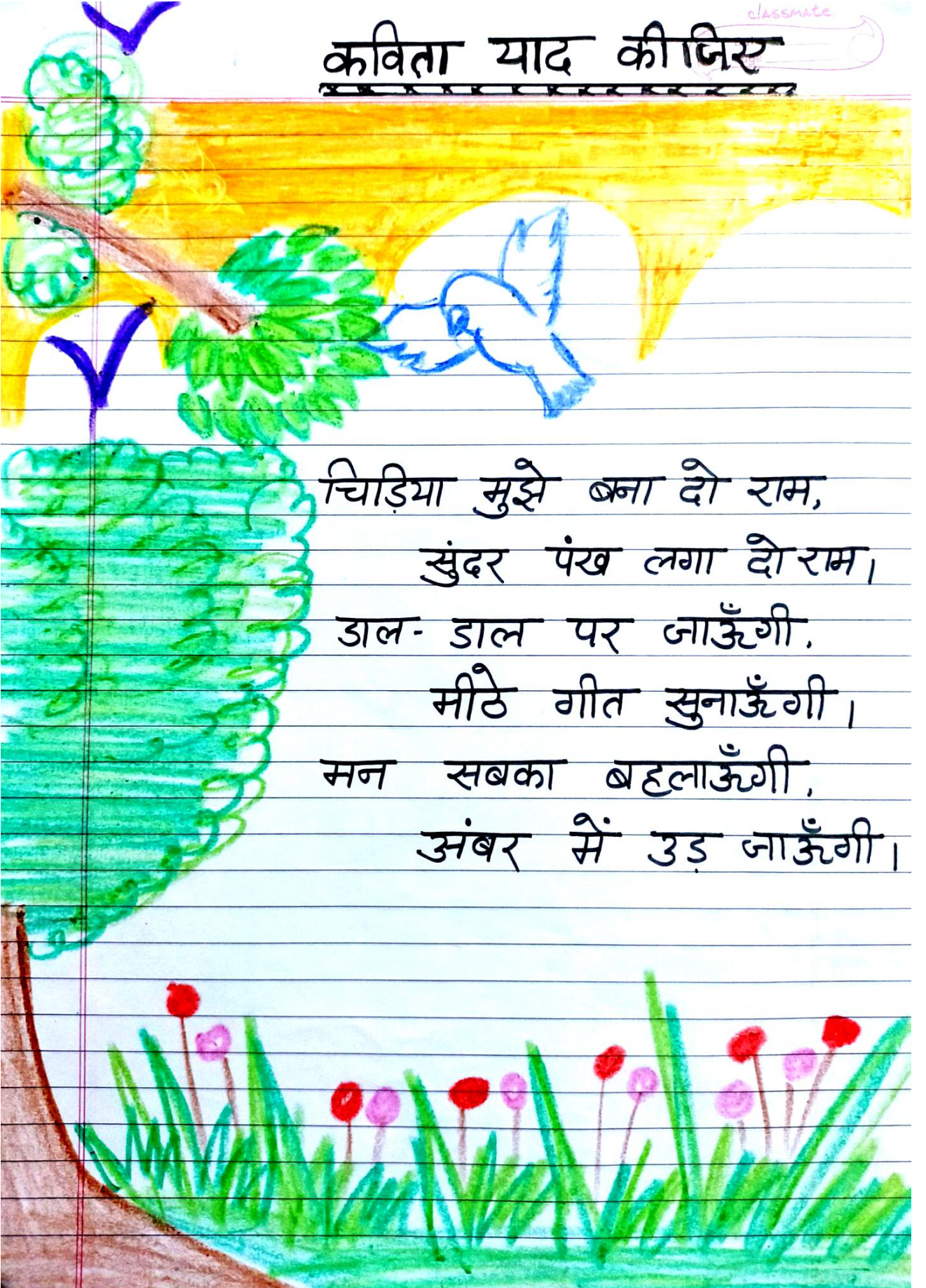
my family
photo

Class- UKG
paste family photo

Subject - Hindiकविता याद कीजिए

classmate

चिड़िया मुझे बना दो राम,
सुंदर पंख लगा दो राम,
डाल- डाल पर जाऊँगी,
मीठे गीत सुनाऊँगी,
मन सबका बहलाऊँगी,
अंबर में उड़ जाऊँगी।



Subject - Mathematics




Qus- Write in the Ascending order-



(1) 46, 17, 65, 49 =

(2) 59, 25, 83, 38 =

(3) 22, 19, 30, 28 =


(4) 30, 34, 18, 27 =

Qus- If number of  = 12,  = 3,
 = 10, then find :

(1)  +  =


(2)  +  =

(3)  +  =

(4)  +  =

Subject - English

MY SELF



(1) What is your name ?

Ans- Hello ! My name is

(2) How old are you ?

Ans- I am years old.

(3) In which class do you study ?

Ans- I study in class

(4) Where do you live ?

Ans- I live in

(5) What is your school name ?

Ans- My school name is

(6) Which subject do you like ?

Ans- I like

(7) Which subject do you don't like ?

Ans- I don't like

Subject - Hindi

1. छोटे उ(७) की मात्रा के दो अक्षर के शब्द
लिखो व याद करो :-

1. पुल

2. कुल

3. पुन

4. बुन

5. तुम

6. उप

7. मुख

8. पुत्र

9. सुन

10. दुम

Subject - EVS

My Sense Organs

1. Tick (✓) the correct options :-

a. How many sense organs do we have

(i) Three (ii) Six (iii) five

b. Which sense organs tells us that door bell is ringing?

(i) Ear (ii) Nose (iii) Skin

c. The sense organs that help us to see is.

(i) Nose (ii) Eys (iii) Ear

Subject - English

Naming Words

Read the naming words in the box and write under the correct category.

Dog	Teacher	Computer	restaurant
Hospital	nurse	pencil	cow
Police station	Father	ladybug	eyeglasses
Chicken	Barber	toothbrush	America

Person

Place

Animal

Thing

Subject - EVS

Let's Revise few Thing:-

- A. Write the names of Days in a week?
- B. Write the names of Months in a year?
- C. Write the names of any 10 vegetables?
- D. Write the names of any 10 colours?

Subject - Mathematics

Write these numbers: -

1. Four hundred seventy three _____
2. Six hundred eighty seven _____
3. Eight hundred nine _____
4. Two hundred sixty nine _____
5. One hundred eleven _____
6. Five hundred twenty one _____


Subject -Hindi

शब्दों का अर्थ से मिलान करो :

- | | |
|---------|-------|
| • सख्त | जल्दी |
| • वजह | मानना |
| • अमल | कठोर |
| • तुरंत | कारण |

Subject -Drawing

निम्न चित्र में रंग भरो-



Subject - English

1. Write the opposite words.

- A. War -
- B. Light -
- C. Start -
- D. Gentle -
- E. Enemy -

2. Join the words to make a new word.

- A. Moon + night -
- B. Break + fast -
- C. Rain + bow -
- D. Water + fall -
- E. Day + break -

Subject - Computer

Answer the following questions:-

- 1. Define computer.
- 2. Write the name of any two input devices.
- 3. Write the name of any two output devices.

4. Write "True" or "False".

- 1. You can play games on a computer. ()
- 2. Computers are used in railways to print books. ()
- 3. A computer always gives correct results. ()
- 4. CPU is the brain of computer. ()

Subject- maths

- (1) Convert 500cm into meters.
- (2) Divide $9/15 \div 3/5$
- (3) How many hundreds are there in ten thousands?
- (4) What was the day before yesterday if tomorrow is Saturday?
- (5) $0.468 \times 10 = \text{-----}$
- (6) Write the decimal equivalent for $42/10$
- (7) Write 75 in Roman numerals.
- (8) Find the L.C.M of 4, 12 & 8.

Subject - Science

Q-1 Name the following:-

- (a) A desert plant -----
- (b) The process of preparation of food by plants -----
- (c) Kitchen of a plant -----
- (d) Keeping food last longer -----
- (e) Plant make of rocks -----

Q-2 Write True and False:-

- (a) Ginger is a stem. -----
- (b) Food is made above the ground. -----
- (c) Food is called chlorophyll. -----
- (d) Carrot plant has tap roots. -----
- (e) Flowers grow from fruits. -----

Subject - GK

Q-1 Answer the following question:-

- (A) Name the continent in which India lies?(B) In which year did India become independent?
- (C) In which year did India become a Republic?
- (D) Who composed the National Anthem of India "Jan -Gan -Man"?
- (E) Who composed the National Song of India " Vande Mataram"?

Question- 2 Name India's:-

- (A) National Flower _____
- (B) National Bird _____
- (C) National Animal _____
- (D) National Anthem _____

Subject - English

1. Choose the right word and fill in the blanks.

- A. The bird sits on _____.(bow/bough)
- B. I have to leave at _____.(two/too)
- C. This sum is _____.(write/right)
- D. Do you ____a secret. (no/know)
- E. I can ____ the bird's song. (hear/here)
- F. He is our _____.(principal /principle)

2. Match the words in column 'A' with column 'B'.

A	B
king	children
teacher	patients
doctor	courtiers
driver	clients
lawyer	passengers
mother	students







Subject - Computer

1. Write the shortcut keys:-

- 1. Open
- 2. Cut
- 3. Redo
- 4. Undo
- 5. New
- 6. Save
- 7. Shutdown
- 8. Refresh
- 9. Paste
- 10. Copy

Subject - Maths

Following pictograph shows the number of girls in five classes.


Class	Number of Girls in classes  = 5 girls
5 th	
6 th	
7 th	
8 th	
9 th	

Answer the below questions:

- Which class has the minimum number of girls?
- Which class has the maximum number of girls?
- How many girls are there in Class 6?
- What is the total number of girls in the Classes 6 to 9?

Subject - Social Studies

Question- 1 Make a drawing to show Day and Night on the Earth due to rotation.








Question- 2 Fill in the blanks:-

- A leap year has _____ numbers of days.
- The daily motion of the Earth is _____.
- Days are shorter during _____ season.
- The movement of the earth around the sun is known as _____.

Subject - Maths

Q.1) The following pictograph shows the number of pet animals sold in a month – Each symbol = 5 pets

Animals in a pet shop	Number of animals sold in a month
Cat	
Dog	
Sheep	
Rabbit	
Parrot	

i) Which pet was sold the most ?

- a) Parrot
- b) Rabbit
- c) Dog

ii) How many more Cats were sold as compared to Sheep ?

- a) 25
- b) 10
- c) 20

iii) How many Dogs were sold in a month ?

- a) 35
- b) 55
- c) 30


iv) How many Parrots were sold in a month?

- a) 16
- b) 15
- c) 10

v) Which pet was sold the least ?

- a) Dog
- b) Cat
- c) Sheep

Subject - GK



ACROSS

DOWN

- | | |
|--|--|
| <p>1 The animals that live in jungle and forest</p> <p>4 Animals that are very few in numbers and may soon no longer exist</p> <p>9 The animals that are kept in farms or homes</p> <p>10 I am the king of jungle. I live in a den</p> <p>12 The animal that swallow their food</p> <p>13 The tallest animal</p> | <p>2 I guard your house. I live in a kennel</p> <p>3 The biggest animal</p> <p>5 I live in a hutch</p> <p>6 Silk threads</p> <p>7 A flightless bird which lived for many years and is now extinct</p> <p>8 Candle</p> <p>11 I chase mice away</p> <p>12 The animals that live with us in our house</p> |
|--|--|